
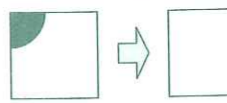
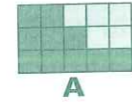





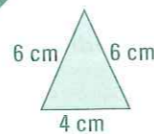
MONDAY

- What is the time?
- 

Measure line XY. cm
- What is the date after 1 week from 12 December?
- Halve 38.
- How many months have 31 days?
- A3, B6, C9,
- $4 \overline{)100} =$
- How many faces are on a sphere?
- Write the date of Christmas Eve.
- A, D, G, J,
- How many faces are on a cylinder?
- Which number is even and a prime number?
- $8 + 700 + 40 + 800 =$
- $7 \times 9 =$
- Which polygon has 8 sides?
- Draw after $a \frac{3}{4}$ turn right. 
- Which has the greater part shaded? 
- Is 100 divisible by 2?
- $8 + 5 =$
- $10 - 0.01 =$




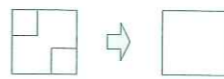
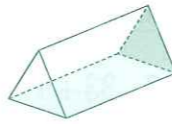






- Draw hands to show 3.20.
- $8 + 9 =$
- Perimeter = cm
- $350 + 450 =$
- The triangle in Question 3 is a(n) triangle.
- $12 \times 8 =$
- A, C, E, G,
- $XIX - VI$ (Roman numerals) =
- How many days are in a school week?
- Kathleen rode her bike 4 km and Linda rode her bike 2000 m. Who rode further?
- Write the number before 600.
- $2.8 + 0.2 =$
- $800 - 280 =$
- $12 - 6 =$
- Write eight thousand and eight as a numeral.
- What is paint sold by?
 ☐ litres ☐ metres ☐ tins
- Name this 2-D shape. 
- Is this a polygon? 
- Draw a reflection. 
- Name a 7-sided polygon.



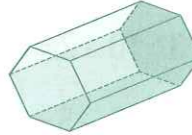

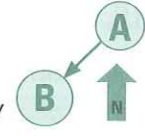
TUESDAY

WEDNESDAY

- What is the time?
- $4 \times 8 =$
- V, VIII, XI,
- If the time is 3.20, what will the time be in 60 minutes?
- Double 16.
- $9^2 =$
- Which is the analog clock, A or B? Tick.
 A ☐ B ☐
  
- What is the sum of 6 and 4?
- Draw a reflection. 
- How many months have 30 days?
- How many mL make up 5.5 L?
 ☐ 55 mL ☐ 550 mL ☐ 5500 mL
- $11 + 10 + 9 + 8 =$
- What is the product of 5 and 12?
- $13 - 5 =$
- Draw a $\frac{1}{4}$ turn left. 
- $0.3 + 2.7 =$
- $20 \div 3 =$ r
- $5 \times 4 =$
- Name this 3-D shape. 
- Circle the equivalent fractions.
 A  B  C  D 



THURSDAY

- Draw hands to show 11.45.
- $8^2 + 3^2 =$ +
- $6 \overline{)129} =$ r
- Name this 3-D shape. 
- $700 - 100 =$
- $70 \div 10 =$
- How many metres make up 1.8 km?
 ☐ 18 m ☐ 1800 m ☐ 180 m
- $4.1 + 0.9 =$
- $30 + 5000 + 700 + 2 =$
- 1A, 3B, 5C,
- What is the difference between 4 September and 12 September?
 days
- $70 - 15 =$
- Name this shape. 
- What is the perimeter of a regular pentagon with 4 cm sides?
 cm
- $3 \times 8 =$
- $900 - 110 =$
- Tick the direction from A to B?
 ☐ NE ☐ NW ☐ SE ☐ SW
 
- $\$0.85 + \$0.25 =$
- $3500 - 1000 =$
- A grocer placed 88 apples into 8 bags. How many apples in each bag? Write the number sentence and solve the problem.
 $\div =$

